

# The History of LEGO

**1930s** – Godtfred Kirk Christiansen starts making LEGO models in Denmark. The first LEGO model is a wooden duck.

**1940s** – The first LEGO BRICK is made out of wood. Primary colours are introduced to the design.

**1950s** – LEGO spreads across the world from Denmark. The first LEGO kit is made. LEGO is made out of plastic.

**1960s** – DUPLO is first made and LEGOLAND opens. There are now 218 different LEGO elements, 57 sets and 25 vehicles. Wooden LEGO toys are discontinued.




**1970s** – LEGO space is introduced and LEGO 'Minifigure' people are made. LEGO doors and windows are also made. A rabbit logo is introduced to the DUPLO brand.

**1980s** – The first LEGO World Cup building championship competition is held. A brick logo is introduced. LEGO celebrates its fifty years jubilee.

**1990s** – The LEGO brick is named one of the 'Products of the Century'. LEGO world shop opens on the internet. LEGO robotics are made. LEGO kids wear is launched. Guinness World Records are broken using LEGO.

**2010s** – The LEGO Movie premieres around the world. LEGO celebrates its 80th birthday. LEGO Friends is launched. LEGO is the world's 3rd largest toy manufacturer.

**2000s** – LEGO celebrates its 75th anniversary. The LEGO BRICK celebrates its 50th birthday. LEGO Clikits for girls is made.



Name \_\_\_\_\_

Date \_\_\_\_\_

## The History of LEGO

1. Who was the inventor of LEGO?

What was his first LEGO model?

---

---

---

---

2. What was the LEGO BRICK originally made from?

When did it begin to be made out of plastic?

---

---

---

---

3. When were LEGO 'Minifigure' people first made?

What else was introduced during this decade?

---

---

---

---

4. When did The LEGO Movie premier?

---

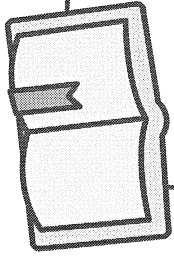
---

5. When did the LEGO BRICK celebrate its 50th birthday?

---

---

# BOOK REVIEW



TITLE: \_\_\_\_\_  
AUTHOR: \_\_\_\_\_  
GENRE: \_\_\_\_\_  
TIME ERA: \_\_\_\_\_  
LOCATION: \_\_\_\_\_  
MAIN CHARACTERS: \_\_\_\_\_

*Favourite Character:*

Gender: \_\_\_\_\_  
Age: \_\_\_\_\_  
Close Relationships: \_\_\_\_\_

Explain why this character is your favourite:

\_\_\_\_\_  
\_\_\_\_\_  
\_\_\_\_\_

*Book summary:*


\_\_\_\_\_  
\_\_\_\_\_  
\_\_\_\_\_  
\_\_\_\_\_  
\_\_\_\_\_  
\_\_\_\_\_  
\_\_\_\_\_  
\_\_\_\_\_  
\_\_\_\_\_  
\_\_\_\_\_

*Favourite part:*

\_\_\_\_\_  
\_\_\_\_\_  
\_\_\_\_\_  
\_\_\_\_\_  
\_\_\_\_\_  
\_\_\_\_\_  
\_\_\_\_\_  
\_\_\_\_\_  
\_\_\_\_\_  
\_\_\_\_\_


# Money – coin combinations

It is important that you are able to recognise these notes and coins so that you are able to spend and save your money wisely.



1 Calculate the total of each group of cash:


a




b




c






d





# Money – coin combinations

**2** Make up each amount below using notes and coins in two different ways:


a Show \$20:



b Show \$50:



c Show \$100:




# PANDORA'S PARTY PALACE

## Snacks

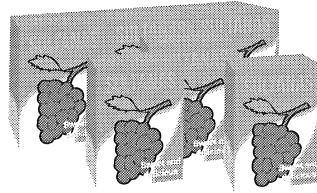
**\$5.95**

**Potato Chips**  
10 packets per pack




**\$3.25**

**Sultanas**  
6 boxes per pack



**\$5.50**


**Popcorn**  
10 packets per pack



## Lunch Items


**\$4.00**

**Chicken Nuggets**  
20 pieces per box



**\$8.00**

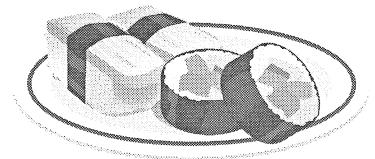
**Mini Pizzas**  
6 pizzas per box



**25% OFF**

**\$20.00**


**Sushi**  
20 rolls per pack



## Sweet Treats

**\$3.50**

**Chocolate Cupcakes**  
10 per box




**\$5.99**

**Yoghurt Iceblocks**  
10 per box



**\$2.18**

**Lollipops**  
Pack of 12



## Drinks

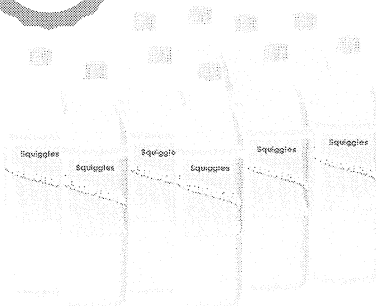
**\$2.75**

**Water**  
6 x 250 mL bottles



**\$10.75**

**Lemonade**  
10 x 375 mL bottles



**\$5.50**

**Juice**  
6 x 250 mL boxes



**FOOD**

# PANDORA'S PARTY PALACE

## Decorations

**\$1.89**

**Party Hats**  
5 hats per pack




**\$2.80**

**Balloons**  
20 per pack



**\$2.10**

**Streamers**  
2 rolls per pack



**\$2.40**

**Bunting**  
1 x 3 m pack




**\$1.68**

**Party Poppers**  
10 per pack



**\$3.20**


**Party Blowers**  
10 per pack



## Serving Supplies

**\$2.50**

**Paper Plates**  
20 plates per pack




**\$3.00**

**Paper Cups**  
25 cups per pack



**\$1.10**


**Straws**  
Box of 50



**10% OFF**


**\$2.80**

**Plastic Tablecloth**  
1 per pack




**\$1.50**

**Serviettes**  
100 per pack



**\$4.50**

**Wet Hand Wipes**  
100 wipes per tub



## PANDORA'S PARTY PALACE

Lucy is buying some sweet treats for a party. She needs at least 80 sweet treats, but she doesn't want more than 100.

What combinations of sweet treats could Lucy buy for the party?

List some possibilities.

Calculate the total cost of the sweet treats for Lucy's party.



## PANDORA'S PARTY PALACE

Mario is planning a pizza party for his birthday. He needs 36 mini pizzas to feed his friends.

How many boxes of mini pizzas does Mario need to buy?

Calculate the total cost of the mini pizzas for Mario's birthday party.



## PANDORA'S PARTY PALACE

Taylor's class was having an end-of-year party. Taylor was asked to bring the drinks. His budget for the drinks was \$40.

What combinations of drinks could Taylor buy for the class party?

List some possibilities.

Check that the drinks don't cost more than \$40.



## PANDORA'S PARTY PALACE

Amy's friends came over to her place for a movie night. Amy bought 5 packs of popcorn to share with her friends.

How many snack-size popcorn packets did Amy have at her movie night?

Calculate the total cost of 5 packs of popcorn.

